



 $d$ [inch]	$d_0$ [inch]	 	 
$\frac{3}{16}$ "	$\frac{1}{2}$ "	(2.2 ft-lb)	(2.2 ft-lb)
$\frac{1}{4}$ "		(3.7 ft-lb)	
$\frac{3}{8}$ "	$\frac{3}{4}$ "	(5.9 ft-lb)	

